



UNIVERSITY OF CAMBRIDGE INTERNATIONAL EXAMINATIONS  
General Certificate of Education Ordinary Level

CANDIDATE  
NAME

CENTRE  
NUMBER

--	--	--	--	--

CANDIDATE  
NUMBER

--	--	--	--



**GEOGRAPHY**

**2217/02**

Paper 2

**May/June 2009**

**2 hours 15 minutes**

Candidates answer on the Question Paper.

- Additional Materials:
- Ruler
  - Calculator
  - Protractor
  - Plain paper

1:50 000 Survey Map Extract is enclosed with this question paper.

**READ THESE INSTRUCTIONS FIRST**

Write your Centre number, candidate number and name in the spaces provided.  
Write in dark blue or black pen.  
You may use a soft pencil for any diagrams, graphs or rough working.  
Do not use staples, paper clips, highlighters, glue or correction fluid.  
**DO NOT WRITE ON ANY BARCODES.**

**Section A**

Answer **all** questions.

**Section B**

Answer **one** question.

Sketch maps and diagrams should be drawn whenever they serve to illustrate an answer.

Insert 1 contains Photograph A for Question 4.

Insert 2 contains Table 2 and Fig. 13 for Question 7, and Table 3 and Figs 15 and 19 for Question 8.

The Survey Map Extract and the Inserts are **not** required by the Examiner.

At the end of the examination, fasten all your work securely together.  
The number of marks is given in brackets [ ] at the end of each question or part question.

For Examiner's Use	
<b>Section A</b>	
Q1	
Q2	
Q3	
Q4	
Q5	
Q6	
<b>Section B</b>	
Q7	
Q8	
<b>Total</b>	

This document consists of **25** printed pages, **3** blank pages and **2** Inserts.



Section A

Answer **all** questions in this section.

For  
Examiner's  
Use

1 Study the 1:50 000 map extract of Grange Hill, Jamaica.

(a) Give the six figure grid reference for the factory in Frome, a small town in the centre of the map extract.

.....[1]

(b) Give the bearing from grid north of the church in Torrington (320770) from the church in Banbury (320798).

.....[1]

(c) How far is it by road from the bridge over the Cabarita River (280833) to the factory in 2978? Give your answer in metres.

.....[1]

(d) List **six** services available in Little London (2177).

.....  
.....  
.....  
.....  
.....  
.....  
.....  
.....[3]

(e) Describe the relief and drainage found in grid square 2386.

.....  
.....  
.....  
.....  
.....  
.....  
.....  
.....[3]

(f) Study the area of the map within the limits shown on Fig. 1.

For  
Examiner's  
Use

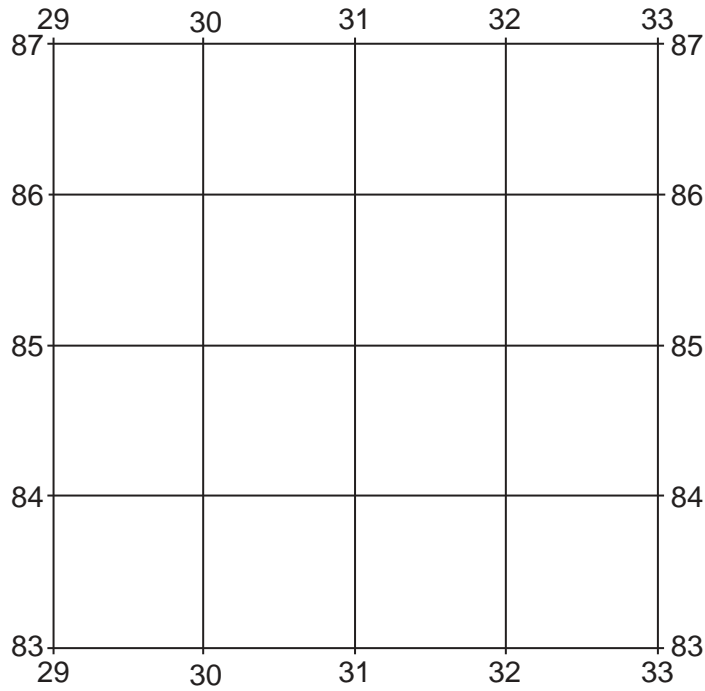


Fig. 1

(i) Describe the land use pattern in this area.


.....  
.....  
.....  
.....  
.....  
.....  
.....  
.....  
.....[5]

(ii) State and give a reason for **two** of the settlement patterns shown in this area.

Pattern	Reason
1. ....	..... .....
2. ....	..... .....[2]

(g) Study the area of the map within the limits shown on Fig. 2.

*For  
Examiner's  
Use*



**Fig. 2**

Suggest why this area is sparsely populated.

.....

.....

.....

.....

.....

.....

.....

.....

.....

..... [4]

[Total: 20 marks]

2 Study Fig. 3, which shows a maximum-minimum thermometer.

For  
Examiner's  
Use

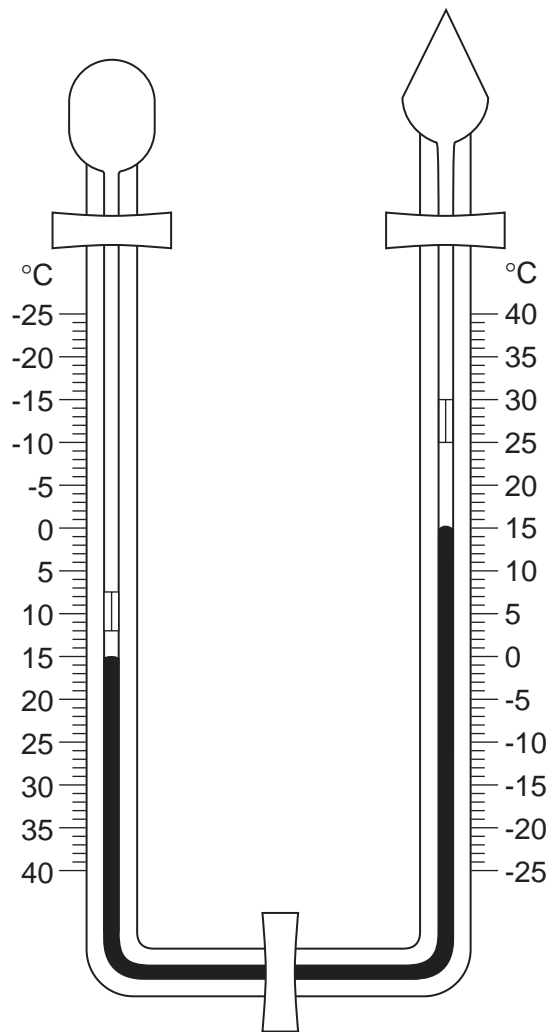


Fig. 3

(a) The maximum temperature has been recorded as 25 °C.

(i) State the minimum temperature.

.....[1]

(ii) Calculate the diurnal (daily) temperature range.

.....[1]

- (b) Study Fig. 4, which is a graph of some readings taken using the instrument shown in Fig. 3.

For  
Examiner's  
Use

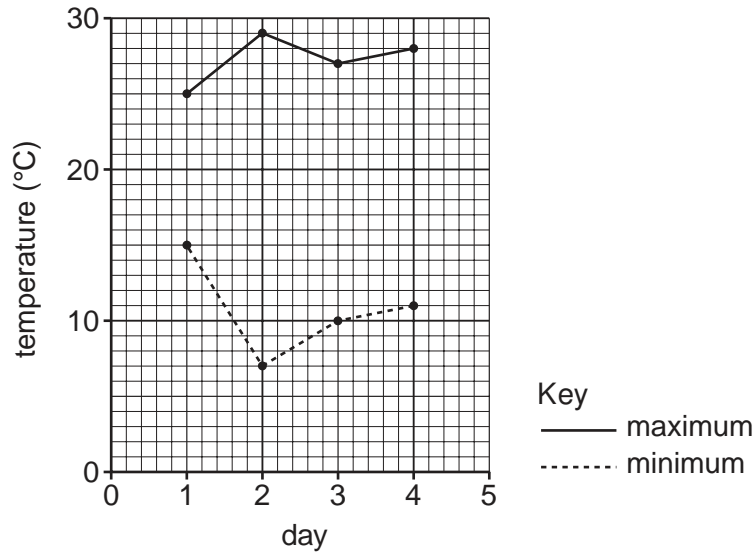


Fig. 4


- (i) On Day 5, the maximum was 24 °C and the minimum was 12 °C. Plot this data on the graph. [1]

- (ii) Which of the five days was most likely to have had cloudless skies throughout?

.....[1]

(c) Study Fig. 5, which shows a Stevenson Screen.

For  
Examiner's  
Use



**Fig. 5**

Explain why a maximum-minimum thermometer is kept in a Stevenson Screen rather than in the open air.

.....

.....

.....

.....

.....

.....

.....

.....

.....[4]

[Total: 8 marks]

- 3 Study Fig. 6, which shows an extract from the Mercalli scale of earthquake intensity, used to measure the observable effects of an earthquake.

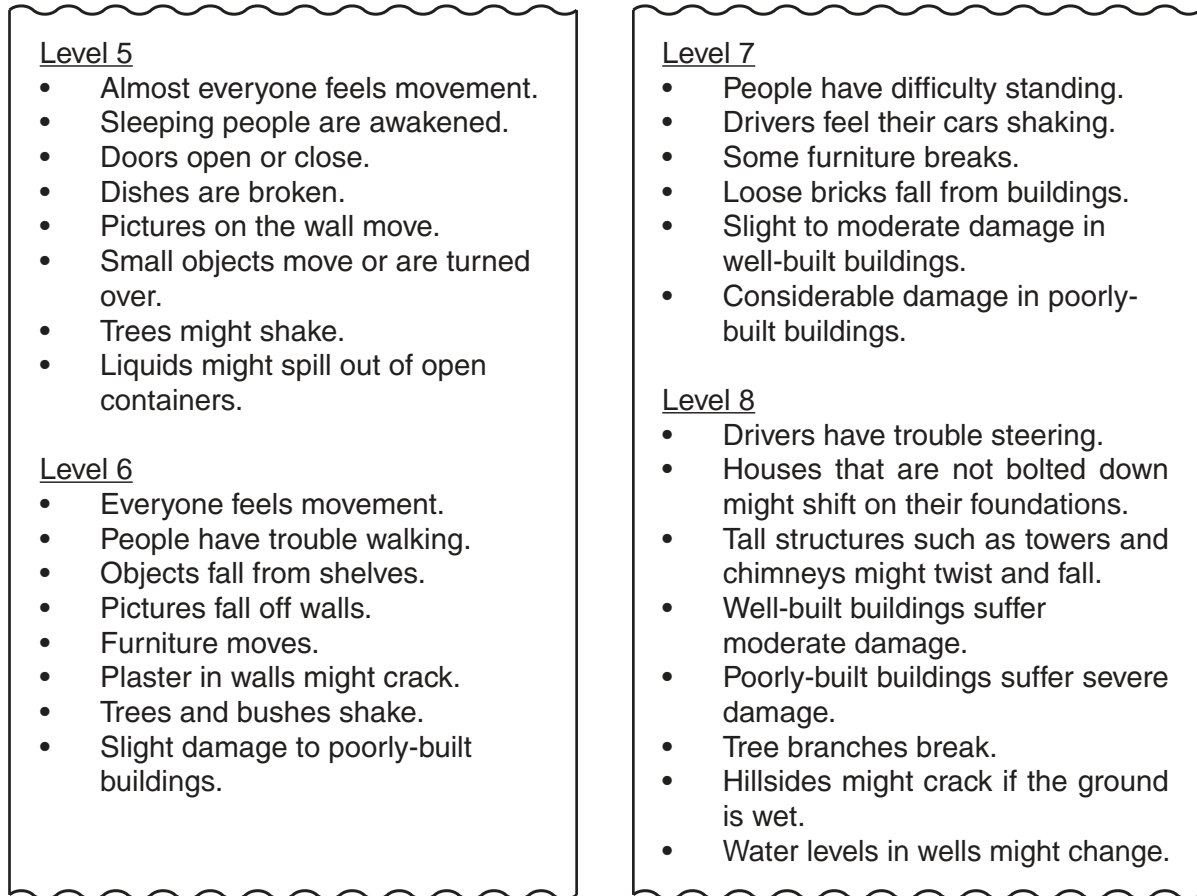


Fig. 6



- (a) Study Fig. 7, which shows the level of intensity of an earthquake which took place in California in 1989.

For  
Examiner's  
Use

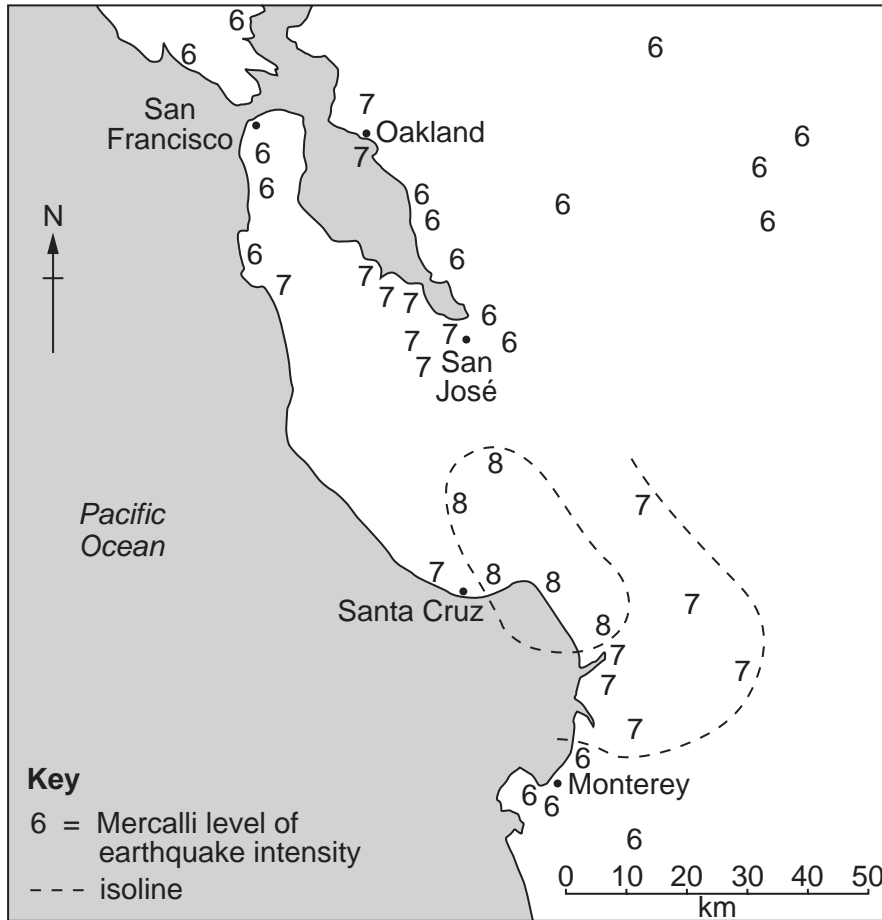


Fig. 7

- (i) On Fig. 7, complete the isoline enclosing the area that experienced an intensity of level 7 or more. [1]
- (ii) Put an X at the probable location of the epicentre. [1]
- (b) For each of the following headings, describe **one** of the earthquake's effects at Monterey on:

people; .....

.....

moveable objects; .....

.....

fixed objects. ....

.....[3]

(c) Fig. 8 is a diary extract describing an earthquake.

For  
Examiner's  
Use

*The start was like children running overhead in a house. By the time I got into the doorway, the sound of breaking glass rose above the low-frequency rumble. I was holding my dog by the collar and we were both having trouble walking.*

*After the shaking was gone for a few seconds we began to assess the damage. Dozens of pictures fell. Most of the appliances 'walked' – the TV was close to toppling, the stove had moved 13cm, the refrigerator had shifted. There was broken glass and pots everywhere. Several things broke because something heavier fell on top of them.*

**Fig. 8**

What level on the Mercalli scale was experienced by this person? Give reasons for your answer.

.....

.....

.....

.....

.....

.....

.....[3]

[Total: 8 marks]

4 Study Photograph A (Insert 1), which shows a city in New Zealand, an MEDC.

(a) Using evidence from Photograph A only, name **three** environments which could be used for outdoor leisure activities. For each of these environments state **one** possible leisure activity.

Environment	Activity
1 .....	.....
2 .....	.....
3 .....	.....[3]

(b) Identify the urban land use zones labelled A, B and C. Choose from Central Business District, Industrial Area, Housing Area. State evidence from the photograph to justify your answer.

A is .....

Evidence .....

.....

B is .....

Evidence .....

.....

C is .....

Evidence .....

.....[3]

(c) Fig. 9 is a diagram of typical land use zones in a city in an MEDC.

For  
Examiner's  
Use

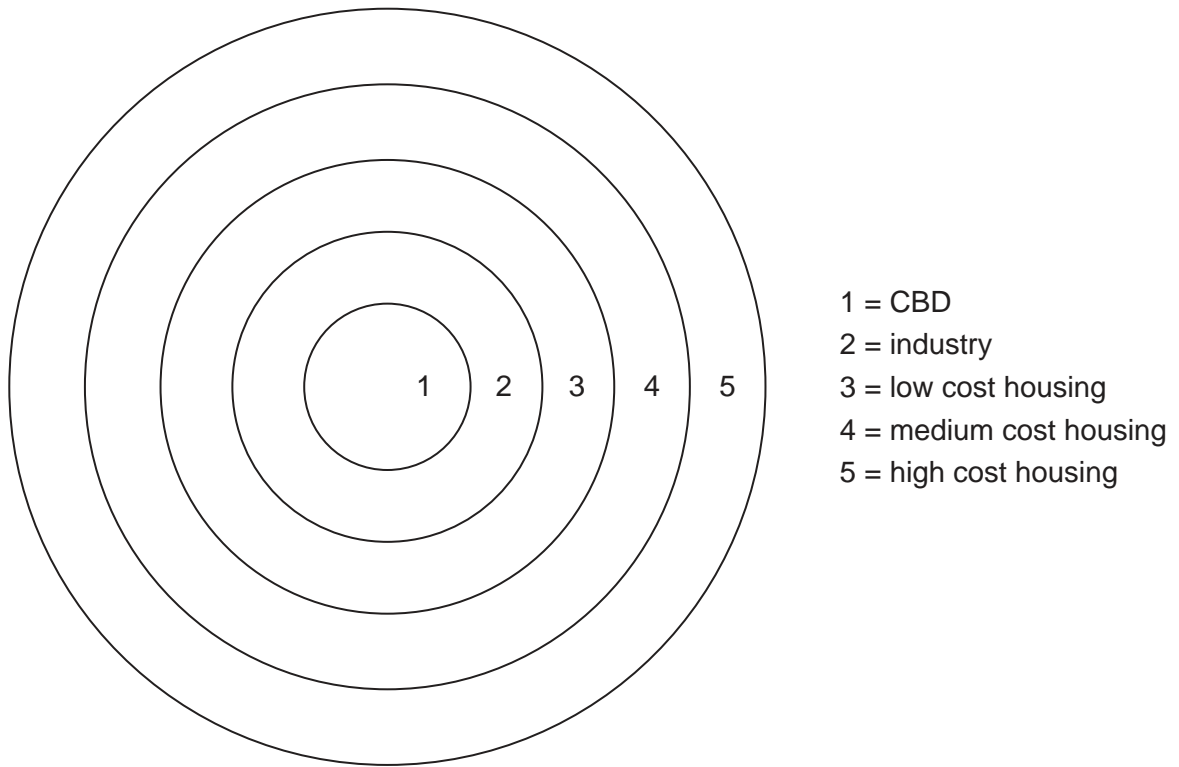


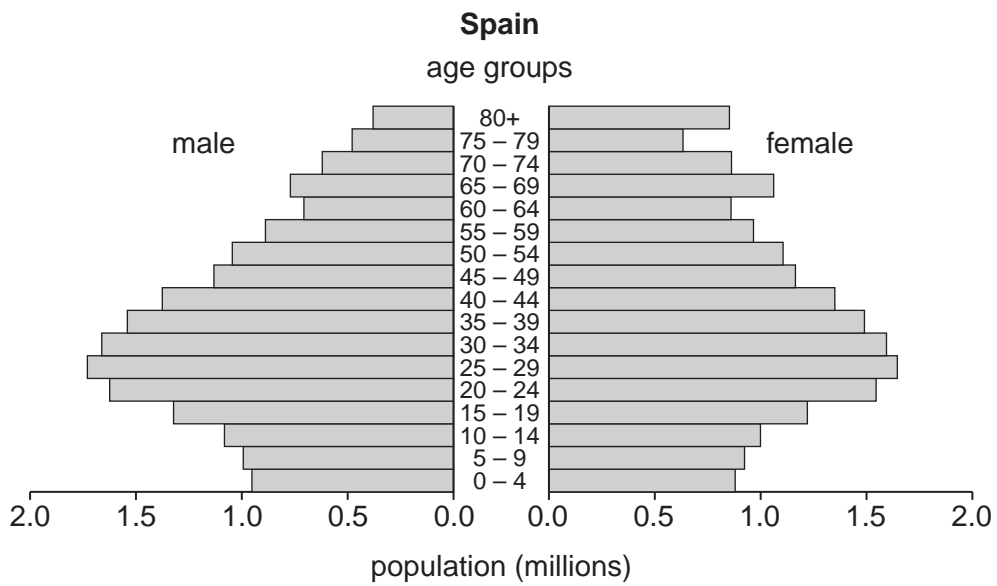
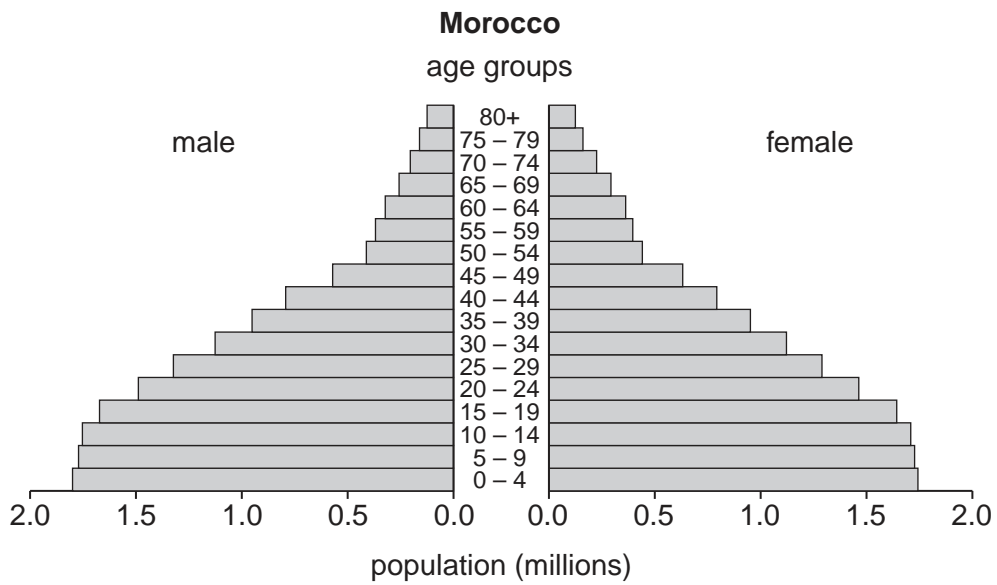
Fig. 9

Suggest why the city in Photograph A does not match the diagram.

.....  
.....  
.....  
.....  
..... [2]

[Total: 8 marks]

5 Study Fig. 10, which shows population pyramids for Morocco and Spain for the year 2000.



**Fig. 10**

(a) In Spain, how many males are in the 5–9 age group?

.....[1]

(b) For each country, state which age group contains the largest proportion of the population.

• Morocco .....

• Spain .....

[2]

(c) Table 1 shows the different age groups for Morocco and Spain which have been grouped from the population pyramids in Fig. 10.

For  
Examiner's  
Use

Table 1

	Morocco	Spain
0–14	35%	15%
15–64	60%	68%
65+	5%	17%

Describe the differences in the size and nature of the dependent populations of Morocco and Spain.

.....  
.....  
.....  
.....  
.....  
.....  
.....[3]

(d) Compare life expectancy in the two countries.

.....  
.....  
.....  
.....[2]

[Total: 8 marks]

6 Study Fig. 11, which shows data about land use and vegetation in three countries.

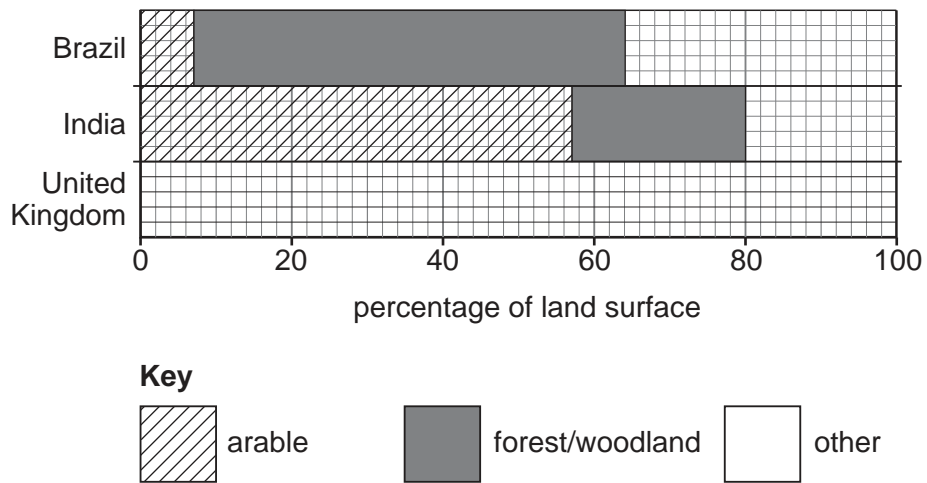


Fig. 11

(a) Complete Fig. 11 to show that United Kingdom has 23% arable, 12% forest/woodland and 65% other. [2]

(b) Compare the land use and vegetation in Brazil and India, as shown in Fig. 11.

.....

.....

.....

.....

.....

.....

.....

..... [3]

(c) What could be represented by 'other' on the graph?

1. ....
2. ....
3. .... [3]

[Total: 8 marks]

Section B

Answer **one** question in this section.

For  
Examiner's  
Use

- 7 Some students were studying traffic flow in and around a town centre. A map of the area studied is shown in Fig. 12.

Number of vehicles going into and out of a town centre

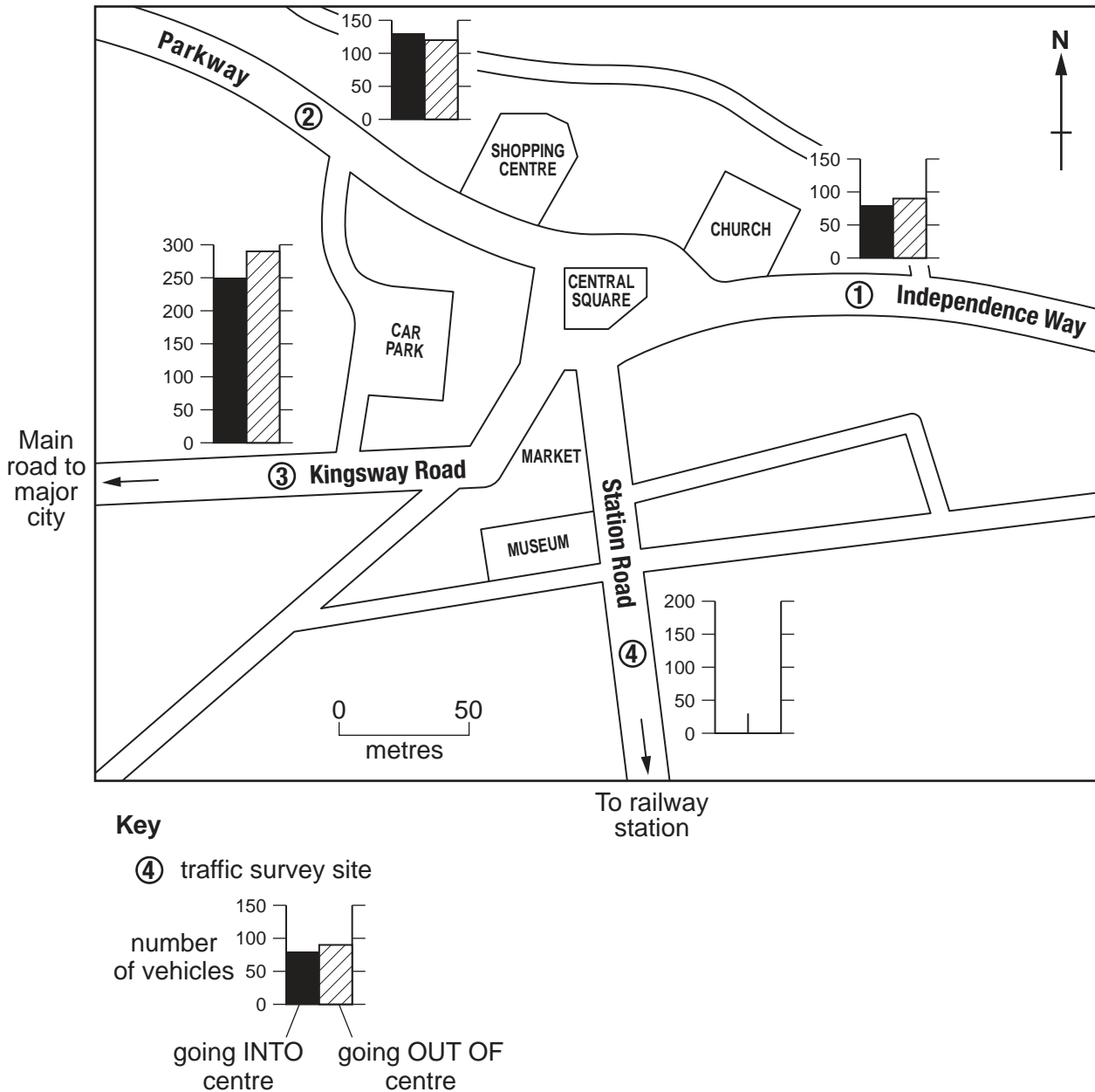


Fig. 12

The students decided to investigate the following hypotheses:

**Hypothesis 1** *Traffic flows will vary in different directions from the town centre*

**Hypothesis 2** *Traffic flows will vary at different times of the day*

Four sites were chosen to conduct traffic surveys. These are shown on Fig. 12. The students decided to do traffic counts three times during a weekday. The times chosen were 08.00, 12.30 and 17.00. They agreed to work in pairs, in order to count the number of vehicles travelling past the four survey sites. They decided that each traffic count would last for 10 minutes.



(a) (i) Describe how each pair of students would carry out their traffic count.

.....  
.....  
.....  
.....  
.....  
.....  
.....  
.....  
.....  
..... [4]

(ii) Suggest why the students decided to conduct each traffic count for 10 minutes.

.....  
.....  
.....  
..... [2]

(b) The results of the students' work are shown in Table 2 (Insert 2).

(i) Use the data in Table 2 to complete the empty bar graph on Fig. 12, to show the total number of vehicles travelling into and out of the town centre along Station Road. [2]

(ii) Use the data in Table 2 to rank the four sites in order of total number of vehicles. Rank from high to low.

Rank	Name of road
Highest	
↑ ↓	
Lowest	

[1]

(iii) Describe the pattern of the total number of vehicles going into and out of the town centre.

.....

.....

.....

.....

.....

.....

.....

..... [3]

(iv) What would be the students' conclusion to **Hypothesis 1**, based on their results? What reasons might the students give to support their conclusion?

.....

.....

.....

.....

.....

.....

.....

.....

.....

.....

..... [4]

- (c) Look at Fig. 13 (Insert 2) and Fig. 14. They show the different traffic flows at 08.00 and 17.00 at the four survey sites.

For  
Examiner's  
Use

Traffic flow at 17.00

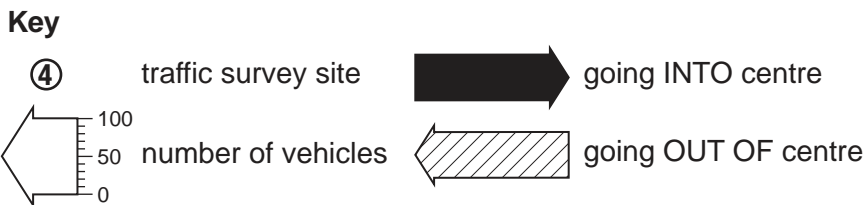
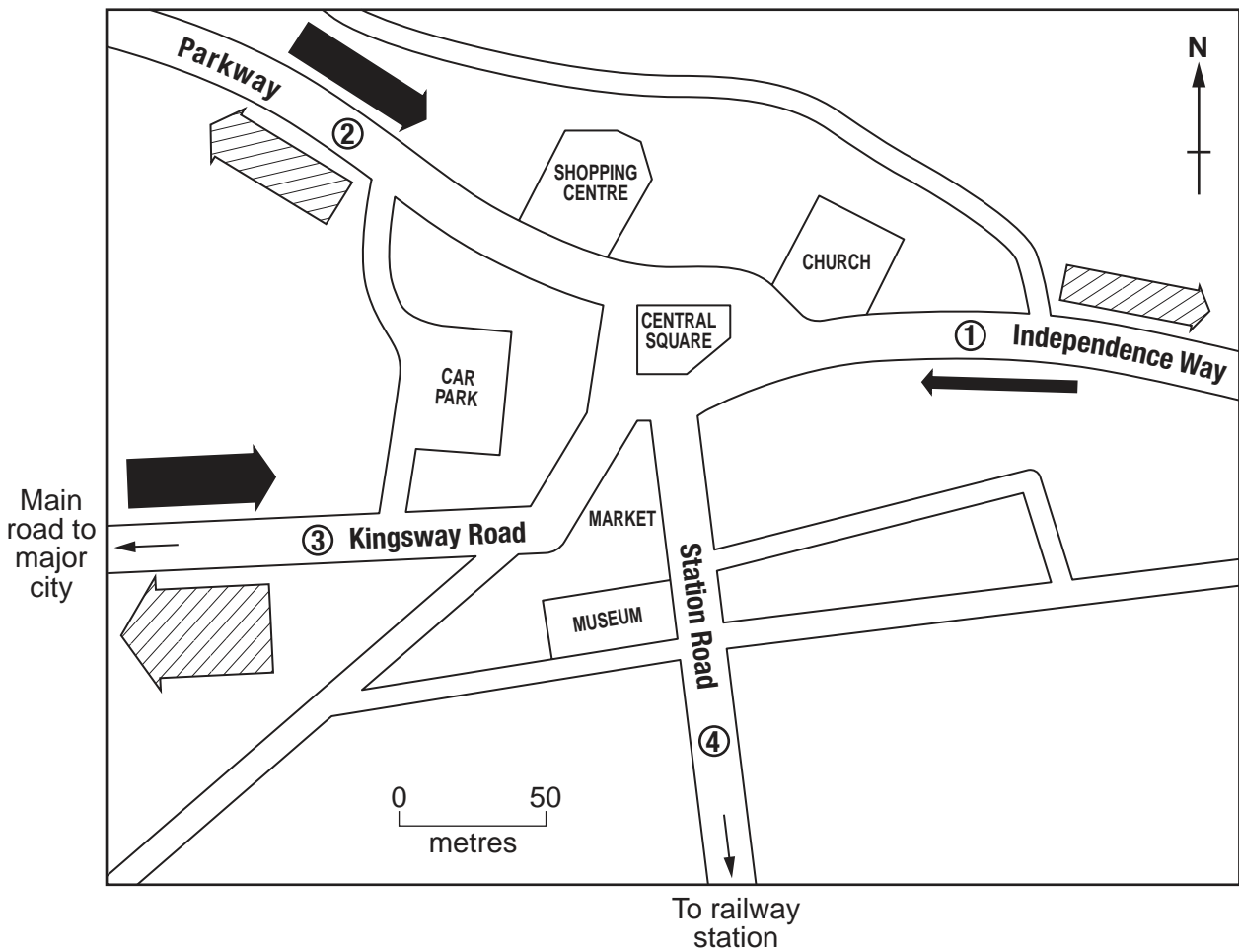


Fig. 14

- (i) Use the data from Table 2 (Insert 2) to draw in the flow lines on Fig. 14, which show the number of vehicles travelling along Station Road at 17.00. [2]
- (ii) Use the information on Fig. 13 (Insert 2) and Fig. 14 to describe the variation in traffic at the two survey times of 08.00 and 17.00 along Independence Way.

.....

.....

.....

..... [2]

(iii) What would be the students' conclusion to **Hypothesis 2**, based on their results? What reasons might the students give to support their conclusion?

.....  
.....  
.....  
.....  
.....  
.....  
.....  
.....  
.....  
.....  
.....  
..... [4]

(d) (i) Suggest improvements to the data collection methods used in the students' investigation.

.....  
.....  
.....  
.....  
.....  
.....  
.....  
.....  
.....  
.....  
.....  
..... [4]

(ii) State **two** other features of traffic in towns that could be investigated at the four traffic survey sites.

1 .....  
.....  
2 .....  
..... [2]

[Total: 30 marks]

**BLANK PAGE**

**TURN OVER FOR QUESTION 8**

- 8 A group of students studied how the characteristics of a river change downstream. A sketch map of the river is shown in Fig. 15 (Insert 2). They wanted to see if the river was typical of most rivers. To do this they decided to test the following hypotheses:

**Hypothesis 1** *Velocity increases downstream*

**Hypothesis 2** *Size and shape of the bedload changes downstream*

- (a) The students selected six sampling sites along the course of the river. The distance of each site from the river's source is shown in Table 3 (Insert 2). Suggest **three** factors the students should have considered in choosing the sampling sites.

1 .....

.....

2 .....

.....

3 .....

..... [3]

- (b) At each site, the students measured the velocity of the river. The results of this test for sampling site 1 are shown in Fig. 16.

**River recording sheet – Sampling site 1**

**Sampling site: 1**

**Measurement of velocity**

Length of time for a small floating object to travel 10 metres;

Test 1 17 seconds

Test 2 23 seconds

Test 3 20 seconds

Mean length of time to float 10 metres =  $\frac{60}{3}$  seconds = 20 seconds

Velocity =  $\frac{\text{distance}}{\text{time}}$

=  $\frac{10 \text{ metres}}{20 \text{ seconds}}$

= 0.5 metres per second

**Fig. 16**

- (i) Use the information in Fig. 16 to describe how the students measured the velocity. Refer to equipment they would use.

.....

.....

.....

.....

.....

.....

.....

.....

.....

.....

..... [4]

- (ii) Before the students began their fieldwork, their teacher worked with them on a pilot study. The results of the study are shown in Fig. 17. Complete Fig. 17 to calculate the mean velocity of the river at this sampling site. Show your calculations.

**Pilot survey river recording sheet**

**Sampling site:**

**Measurement of velocity**

Length of time for a small floating object to travel 10 metres;

- Test 1 27 seconds
- Test 2 20 seconds
- Test 3 28 seconds

Mean length of time to float 10 metres =

Velocity =  $\frac{\text{distance}}{\text{time}}$

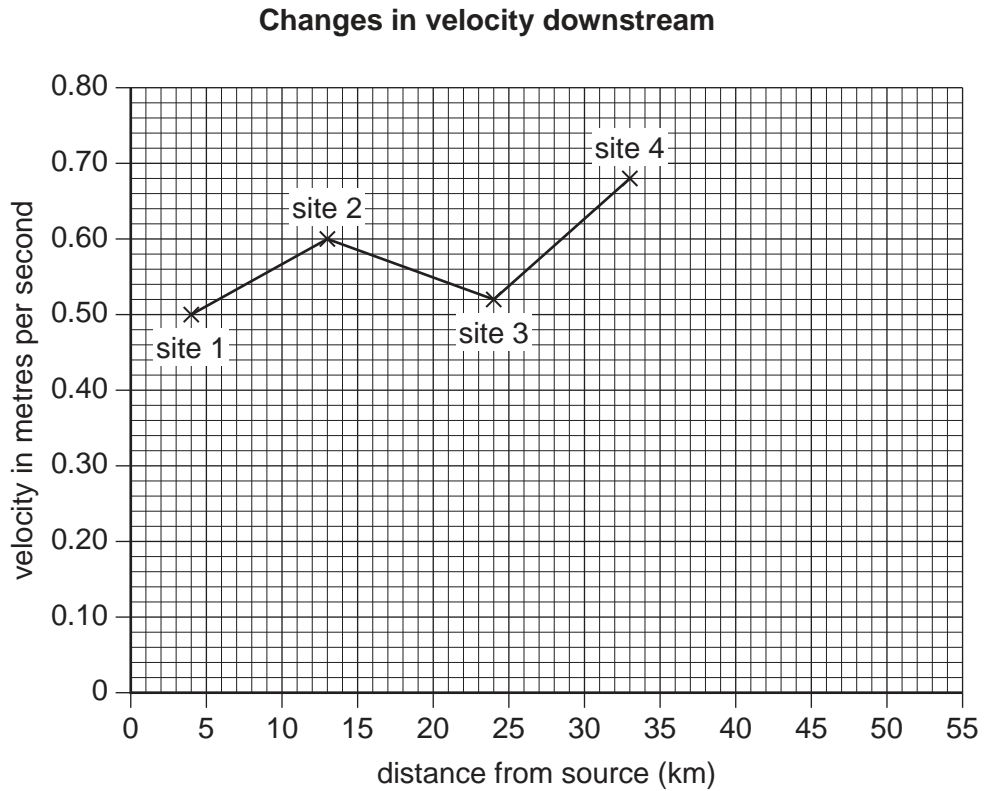
=

=

**Fig. 17**

[3]

- (iii) The results which the students obtained at the sampling sites are shown in Table 3 (Insert 2). Use these results to complete Fig. 18 to show how velocity changes downstream.



**Fig. 18**

[2]

- (iv) By looking at their results, what conclusion could the students make about **Hypothesis 1** (*Velocity increases downstream*)?

.....

.....

.....

..... [2]

- (c) At each site, the students also sampled and measured stones on the river bed (bedload).

- (i) Describe a sampling technique they could use to get an accurate sample of bedload material.

.....

.....

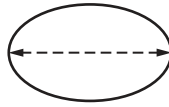
.....

..... [2]



(ii) Having collected their sample, the students wanted to find out the size and 'roundness' of each stone. Using the equipment shown in Fig. 19 (Insert 2) they decided to make two simple measurements:

- the longest axis, as shown below



- the roundness of the stone

Describe how they made the measurements.

.....  
.....  
.....  
..... [2]

(iii) The results of this investigation are shown in Table 3 (Insert 2). From these results, what conclusions could the students make about how the size and shape of bedload changes downstream (**Hypothesis 2 – Size and shape of the bedload changes downstream**)?

.....  
.....  
.....  
..... [2]

(iv) Explain why the size and shape of bedload changes downstream.

.....  
.....  
.....  
..... [2]

- (d) Suggest improvements the students could have made to the data collection methods to make the results more reliable.

For  
Examiner's  
Use

.....

.....

.....

.....

.....

.....

.....

.....

.....

.....

..... [4]

- (e) In order to extend their fieldwork, the students could have investigated the impact of people on the river. State **one** impact people could have had on a river. Describe how the impact could be investigated.

.....

.....

.....

.....

.....

.....

.....

.....

.....

.....

..... [4]

[Total: 30 marks]



---

*Copyright Acknowledgements:*

Question 4 Photograph A      S. Bird © UCLES  
Question 5 Fig. 10          © US Census Bureau

Permission to reproduce items where third-party owned material protected by copyright is included has been sought and cleared where possible. Every reasonable effort has been made by the publisher (UCLES) to trace copyright holders, but if any items requiring clearance have unwittingly been included, the publisher will be pleased to make amends at the earliest possible opportunity.

University of Cambridge International Examinations is part of the Cambridge Assessment Group. Cambridge Assessment is the brand name of University of Cambridge Local Examinations Syndicate (UCLES), which is itself a department of the University of Cambridge.